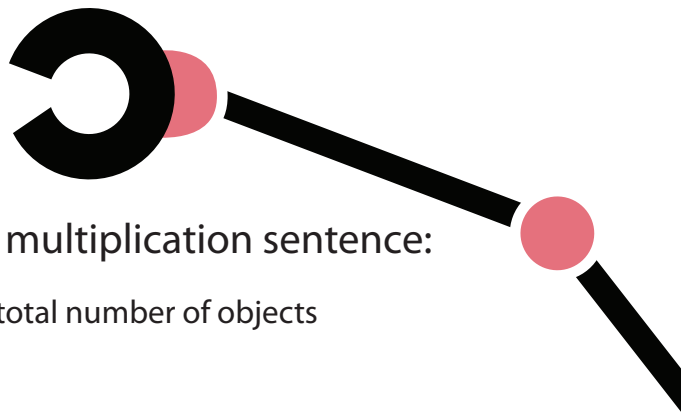


# Multiplication:

Let's Make an Array!




Review what each factor represents in this multiplication sentence:


rows  $\leftarrow 4 \times 3 = 12 \rightarrow$  total number of objects  
objects in each row

Make an array for each multiplication problem and fill in the answer. Color in each array.


Example:  $2 \times 4 = 8$




1.  $4 \times 4 = 16$




2.  $3 \times 5 = 15$



3.  $4 \times 5 = 20$



4.  $1 \times 2 = 2$



5.  $5 \times 6 = 30$

