


Multiplication:

Equal Group Problems

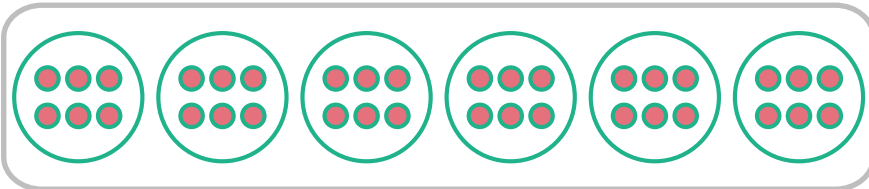
Directions: Use the equal group drawings to solve the multiplication problems.

1.




$5 \times 3 = \underline{\quad}$

2.




$6 \times 6 = \underline{\quad}$

3.



$10 \times 4 = \underline{\quad}$

4.



$7 \times 4 = \underline{\quad}$

