



Multiplying Acorns

Complete the addition and multiplication sentences for each picture.




$$2 + \underline{\quad} + \underline{\quad} + \underline{\quad} = \underline{\quad}$$

$$4 \times 2 = \underline{\quad}$$




$$3 + \underline{\quad} + \underline{\quad} = \underline{\quad}$$

$$3 \times 3 = \underline{\quad}$$



$$4 + \underline{\quad} + \underline{\quad} + \underline{\quad} = \underline{\quad}$$

$$4 \times 4 = \underline{\quad}$$



$$6 + \underline{\quad} = \underline{\quad}$$

$$2 \times 6 = \underline{\quad}$$