












# Addition and Subtraction Practice

For each problem below, first solve and then circle the correct answer.

Show all your work and have fun coloring in the pictures.

1. $\begin{array}{r} 24 \\ +13 \\ \hline \end{array}$ <p>a. 73 b. 35 c. 37</p> 	2. $\begin{array}{r} 82 \\ -50 \\ \hline \end{array}$ <p>a. 30 b. 32 c. 28</p> 	3. $\begin{array}{r} 74 \\ -22 \\ \hline \end{array}$ <p>a. 52 b. 50 c. 62</p> 
4. $\begin{array}{r} 55 \\ +32 \\ \hline \end{array}$ <p>a. 87 b. 77 c. 97</p> 	5. $\begin{array}{r} 77 \\ -44 \\ \hline \end{array}$ <p>a. 34 b. 33 c. 35</p> 	6. $\begin{array}{r} 36 \\ +26 \\ \hline \end{array}$ <p>a. 63 b. 52 c. 62</p> 
7. $\begin{array}{r} 48 \\ +22 \\ \hline \end{array}$ <p>a. 72 b. 60 c. 70</p> 	8. $\begin{array}{r} 92 \\ -13 \\ \hline \end{array}$ <p>a. 79 b. 69 c. 78</p> 	9. $\begin{array}{r} 36 \\ -13 \\ \hline \end{array}$ <p>a. 23 b. 24 c. 21</p> 
10. $\begin{array}{r} 63 \\ +23 \\ \hline \end{array}$ <p>a. 76 b. 86 c. 96</p> 	11. $\begin{array}{r} 78 \\ -35 \\ \hline \end{array}$ <p>a. 53 b. 43 c. 44</p> 	12. $\begin{array}{r} 55 \\ +35 \\ \hline \end{array}$ <p>a. 90 b. 92 c. 80</p> 