


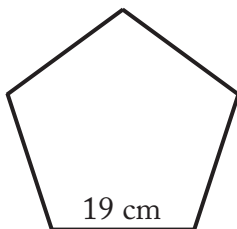
More Pentagon Perimeter Practice

Directions: Find the perimeter of each pentagon.

Remember $p=5a$ where $a = \text{side}$.

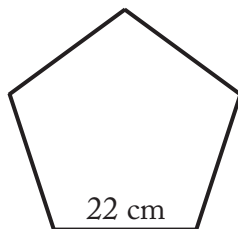


1.



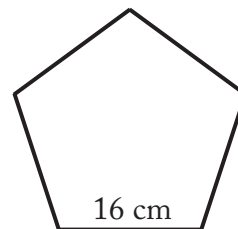
$$A = \underline{\hspace{2cm}}$$

2.



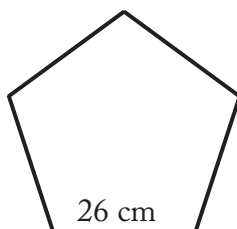
$$A = \underline{\hspace{2cm}}$$

3.



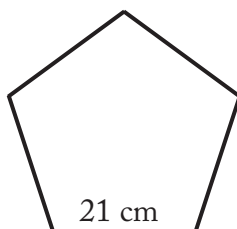
$$A = \underline{\hspace{2cm}}$$

4.



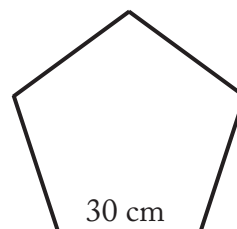
$$A = \underline{\hspace{2cm}}$$

5.



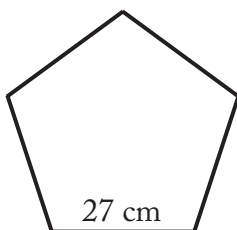
$$A = \underline{\hspace{2cm}}$$

6.



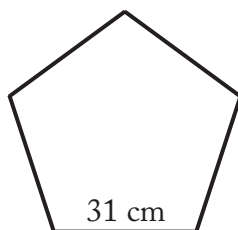
$$A = \underline{\hspace{2cm}}$$

7.



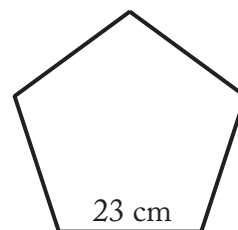
$$A = \underline{\hspace{2cm}}$$

8.



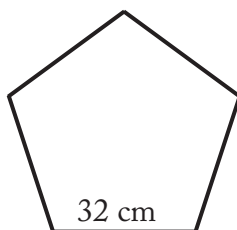
$$A = \underline{\hspace{2cm}}$$

9.



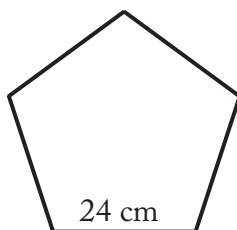
$$A = \underline{\hspace{2cm}}$$

10.



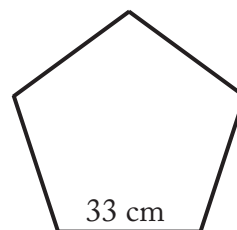
$$A = \underline{\hspace{2cm}}$$

11.



$$A = \underline{\hspace{2cm}}$$

12.



$$A = \underline{\hspace{2cm}}$$