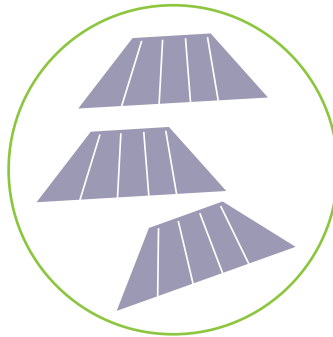



Fewer More or Equal



Look at the clothes below and write down how many there are in the space. Answer the questions below by drawing circles around the word fewer or more.



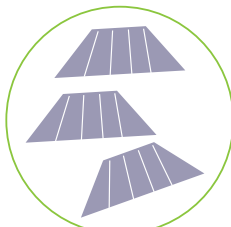




is fewer than
is equal to



is more than
is equal to



is fewer than
is equal to

