



Waiter's Tip

At the Yum Yum cafe, the waiters are counting their tips.
Help them by answering the following questions.


1. Daniel served dinner for table 14. The check came to \$100. The customers tipped him 25%. How much was his tip?



2. Sammy served lunch for table 7. The total came to \$55. The customers gave a 15% tip to Sammy. How much was his tip?



3. Kat served dessert for table 3. The total cost was \$20. The customers gave a tip of 12% to Kat. How much was her tip?



Challenge

At the Yum Yum cafe, the waiters combine their tips and divide the total by the number of waiters. Today's tip total is \$132, and three waiters are working. How much money in tips does each waiter get?

