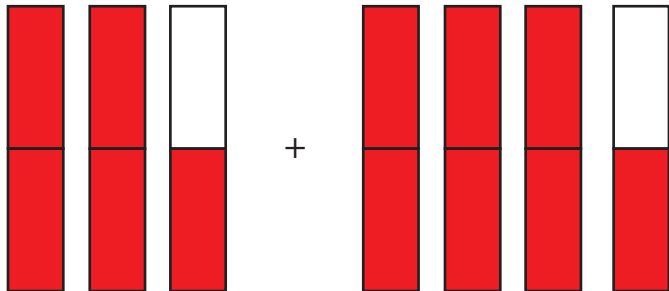


Name: _____

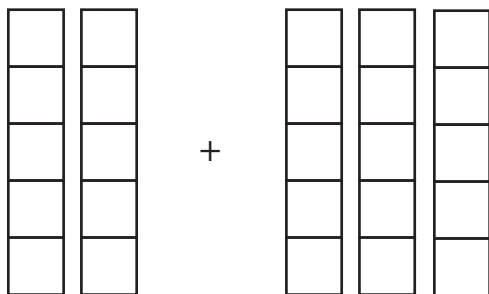
Date: _____

Mixed Fraction Addition Practice: Like Denominators

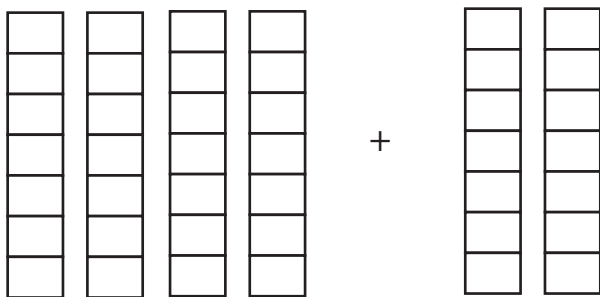
Use the visual models to add the mixed fractions.



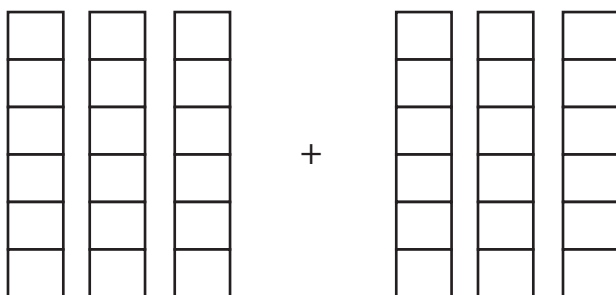
$$2 \frac{1}{2} + 3 \frac{1}{2} = \boxed{}$$



$$1 \frac{2}{5} + 2 \frac{1}{5} = \boxed{}$$



$$3 \frac{3}{7} + 1 \frac{3}{7} = \boxed{}$$



$$2 \frac{2}{6} + 2 \frac{5}{6} = \boxed{}$$