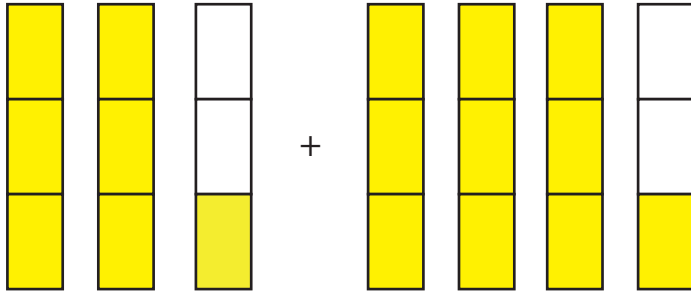


Name: _____

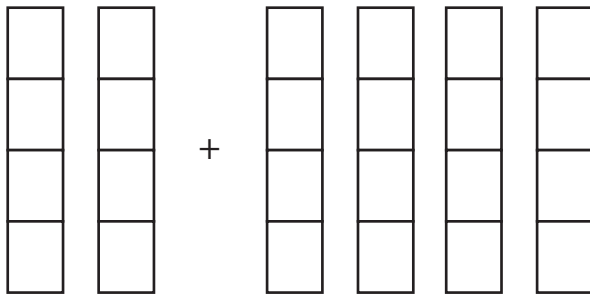
Date: _____

Mixed Fraction Addition Practice: Like Denominators

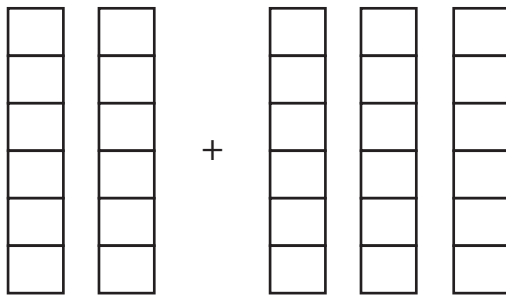
Use the visual models to add the mixed fractions.



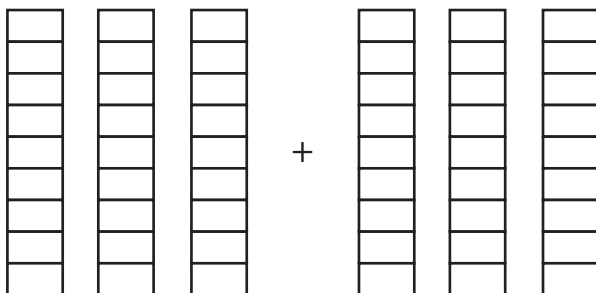
$$2 \frac{1}{3} + 3 \frac{1}{3} = \boxed{}$$



$$1 \frac{2}{4} + 3 \frac{1}{4} = \boxed{}$$



$$1 \frac{3}{6} + 2 \frac{2}{6} = \boxed{}$$



$$2 \frac{5}{9} + 2 \frac{3}{9} = \boxed{}$$