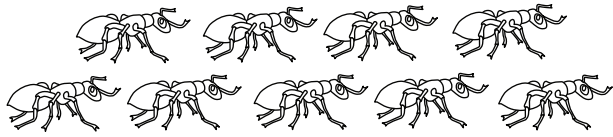


Name: _____


Date: _____

Mid-Year Kindergarten Math Assessment: Subtraction within 10


Directions: Use the pictures to help you solve each problem. Cross out the amount to take away, then count how many are left.




$$9 - 1 = \underline{\quad}$$




$$5 - 2 = \underline{\quad}$$



$$6 - 3 = \underline{\quad}$$




$$2 - 0 = \underline{\quad}$$



$$7 - 4 = \underline{\quad}$$



$$4 - 4 = \underline{\quad}$$




$$8 - 2 = \underline{\quad}$$



$$7 - 1 = \underline{\quad}$$



$$10 - 5 = \underline{\quad}$$



$$10 - 4 = \underline{\quad}$$