

Name: _____


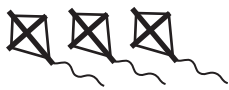
Date: _____



Mid-Year Kindergarten Math Assessment: Addition within 10



Directions: Solve the addition problems.


$$5 + 1 = \underline{\quad}$$

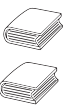
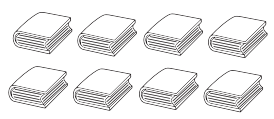

$$7 + 3 = \underline{\quad}$$




$$3 + 4 = \underline{\quad}$$


$$2 + 2 = \underline{\quad}$$


$$4 + 5 = \underline{\quad}$$


$$6 + 1 = \underline{\quad}$$


$$8 + 2 = \underline{\quad}$$


$$9 + 1 = \underline{\quad}$$