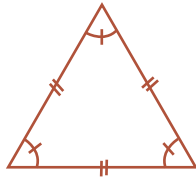
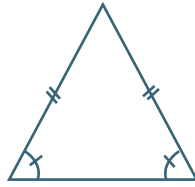


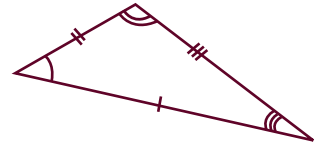
Meet the Triangles



Equilateral triangle



Isosceles triangle



Scalene triangle

Read the questions below. Write the name of the triangle, then draw it in the space provided.

1. I have 2 equal sides.

What kind of triangle am I? _____
Draw me!

2. I have 3 different sides and 3 different angles.

What kind of triangle am I? _____
Draw me!

3. I have 3 angles equal to 60° degrees.

What kind of triangle am I? _____
Draw me!

4. I have 2 equal angles.

What kind of triangle am I? _____
Draw me!