


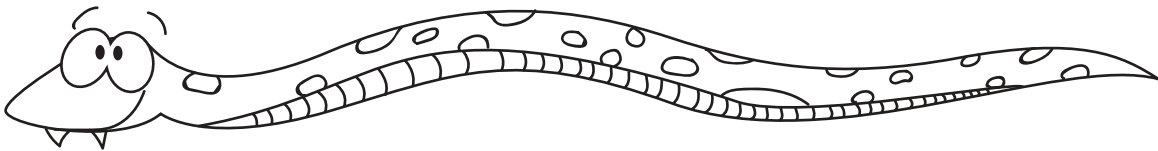
Name: _____

Measuring

Snakes



Estimate how many inches long you think each snake is from head to tail. Go back to the top of the page and use the ruler to see how close your guesses are! Record your measurement under each snake.



Estimated length: _____

Actual length: _____



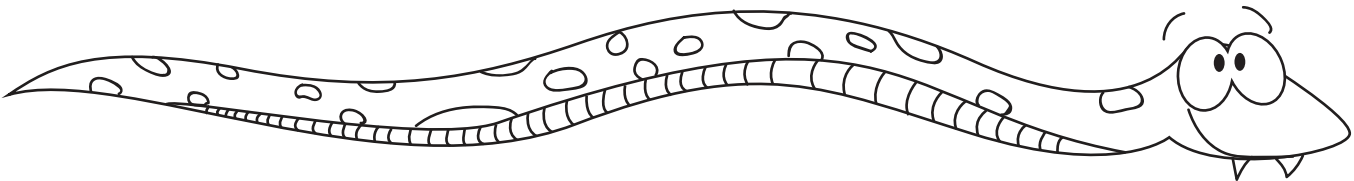
Estimated length: _____

Actual length: _____



Estimated length: _____

Actual length: _____



Estimated length: _____

Actual length: _____