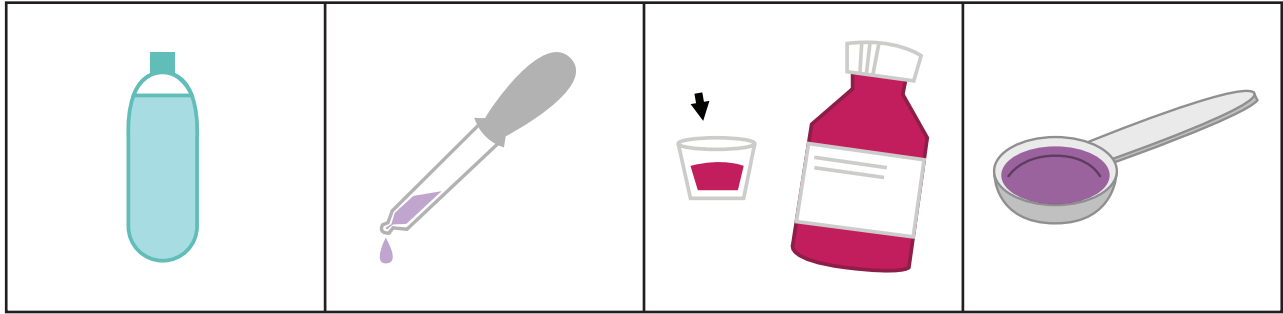


# Measurement: Which One Doesn't Belong?

**Directions:** Circle the picture that does not belong with the other three pictures. Then, write an explanation to express why it does not belong.


1.



**Explanation:** The three pictures belong together because \_\_\_\_\_

but the circled picture does not belong because \_\_\_\_\_

2.



**Explanation:** The three pictures belong together because \_\_\_\_\_


but the circled picture does not belong because \_\_\_\_\_

Name \_\_\_\_\_

Date \_\_\_\_\_

# Measurement: Which One Doesn't Belong?

3.



**Explanation:** The three pictures belong together because \_\_\_\_\_

\_\_\_\_\_

but the circled picture does not belong because \_\_\_\_\_

\_\_\_\_\_

4.



**Explanation:** The three pictures belong together because \_\_\_\_\_

\_\_\_\_\_

but the circled picture does not belong because \_\_\_\_\_

\_\_\_\_\_