
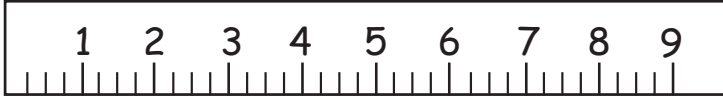

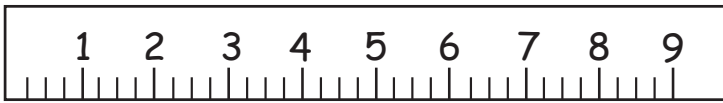


Measurement Mania: TIME TO REVIEW

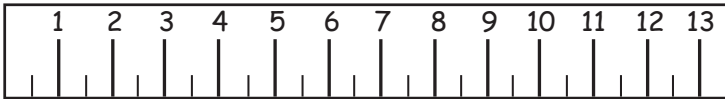
How many **inches** is the pencil? _____





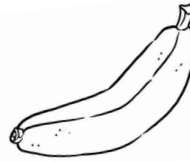

How many **inches** is the match? _____




How many **centimeters** is the feather? _____



Circle all the objects that weigh **less than 1 pound**.




Circle all the objects that weigh **more than 1 pound**.



Circle the correct answers.

How much is **1 quart**?



4 pints

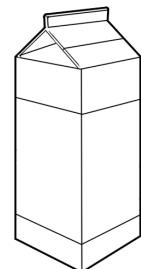


4 cups

How much is **1 liter**?



about 1 gallon



about 1 quart