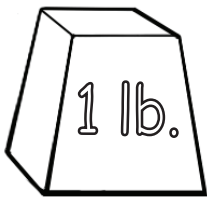




Measurement Mania: POUNDS




1 pound of
bananas
(about 3)



1 pound loaf
of bread



1 pound jar
of peanut
butter



Does it weigh more or less than 1 POUND?

Circle the correct answer.

