
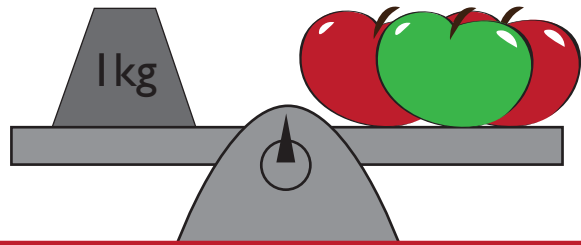

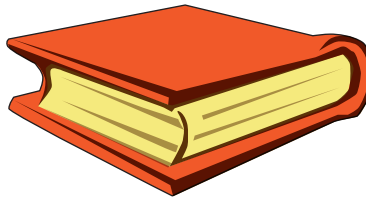


Learning to Measure in Kilograms

This bunch of apples weighs one kilogram. Look at the items below and decide if they weigh more, or less than one kilogram.



- a) < 1 kg
- b) > 1 kg




- a) < 1 kg
- b) > 1 kg



- a) < 1 kg
- b) > 1 kg



- a) < 1 kg
- b) > 1 kg




- a) < 1 kg
- b) > 1 kg




- a) < 1 kg
- b) > 1 kg



- a) < 1 kg
- b) > 1 kg



- a) < 1 kg
- b) > 1 kg



- a) < 1 kg
- b) > 1 kg