


3rd
Grade


Learning about Volume

Word Problems


Answer the questions below
and show your work.



This glass holds 200 milliliters of orange juice.
This box holds 500 milliliters of orange juice.
How much more does the box hold?



There are 550 milliliters of red paint in one can.
There are 720 milliliters of green paint in the other.
How much more of the green paint is there?



Marlene produced 200 liters of milk. Hallie produced 317 liters of milk.
How much more did Hallie produce?



The chef used 100 milliliters of cooking oil
to fry chicken wings. He used 78 milliliters of
cooking oil to fry onions. How much more oil
did he use for the chicken wings?

Challenge!



There are 10 liters of punch at the party.
How many milliliters are there?
(*Hint: 1 liter is equal to 1000 milliliters)