

3rd
Grade

Learning about Weight

Word Problems


Answer the questions below
and show your work.




This whale weighs 1000 kilograms.
This sea turtle weighs 50 kilograms.
How much heavier is the whale?



This lion weighs 150 kilograms.
This rabbit weighs 2 kilograms.
How much heavier is the lion?




This octopus weighs 75 kilograms.
This starfish weighs 5 kilograms.
How much heavier is the octopus?



This jellyfish weighs 18 grams.
This seahorse weighs 2 grams.
How much heavier is the jellyfish?

Challenge!



This dog weighs 10 kilograms. This robin weighs 5 grams.
How much heavier is the dog? (*Hint: 1 kilogram is equal to 1000 grams).