


# MEASURE UP!



Use the rulers to measure and write the length.



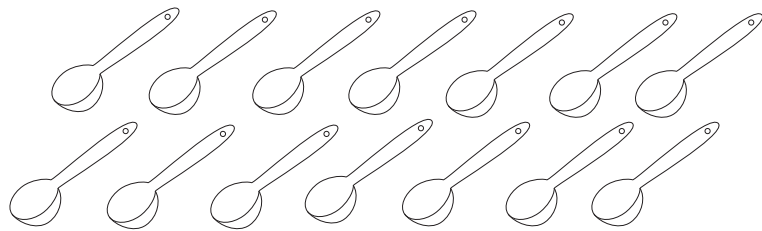

about \_\_\_\_\_ inches



about \_\_\_\_\_ centimeters




Color the teaspoons to show the same amount.



Circle the answer that is the closest to the object's weight.


1



more than 1 pound

less than 1 pound

2



more than 1 gram

less than 1 gram