


Learning about measuring in *centimeters*

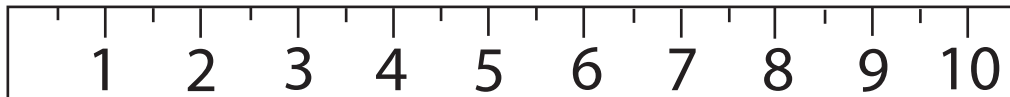


Let's practice measuring using *centimeters*. Here is an example:

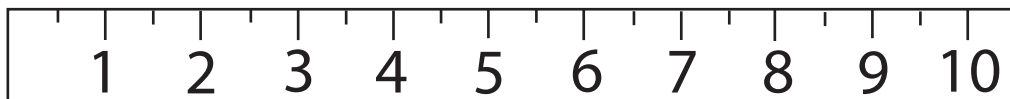


The ribbon measures: 4 *centimeters* long

Write how many inches each ribbon measures.



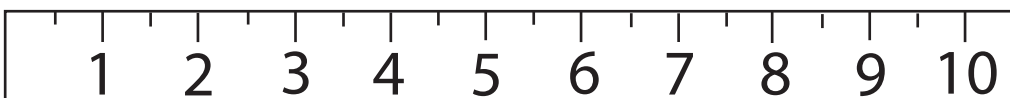
_____ centimeters



_____ centimeters



_____ centimeters



_____ centimeters