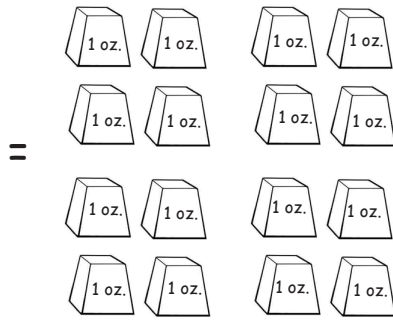
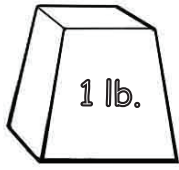



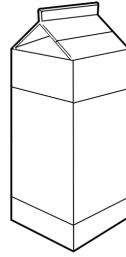
MEASURE AND COMPARE

Weight



1 pound = 16 ounces

Volume



1 quart = 4 cups



1 pint = 2 cups

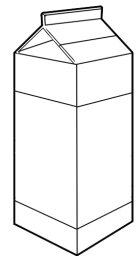
8 ounces of grapes weigh

- A. 1 pound
- B. 1/2 pound
- C. 2 pounds




How many pints are in 1 quart of juice?

- A. 2 pints
- B. 3 pints
- C. 4 pints




The kitten weighs 2 pounds. How many ounces does it weigh?

_____ ounces




How many cups are in 2 quarts of milk?

- A. 6 cups
- B. 10 cups
- C. 8 cups

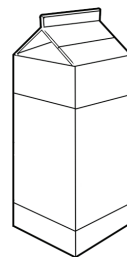


Which weighs more?

- A. 12 ounces of oranges
- B. 2 pounds of apples



True or False



=

