



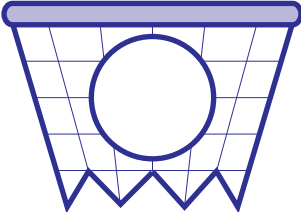
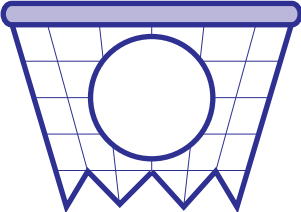
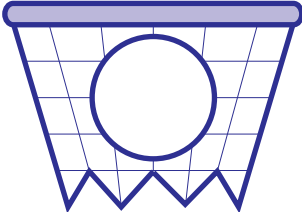
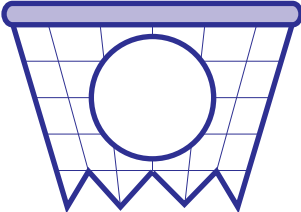

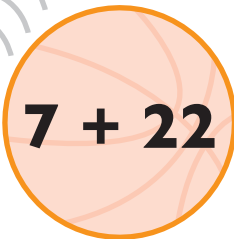


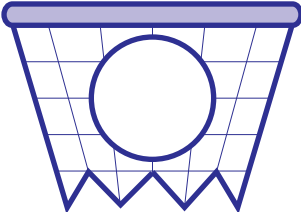
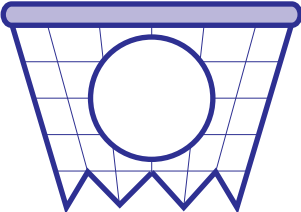
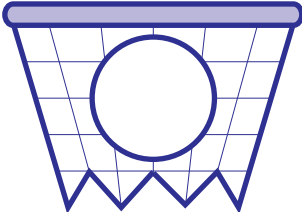
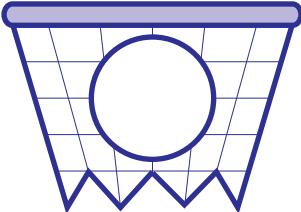




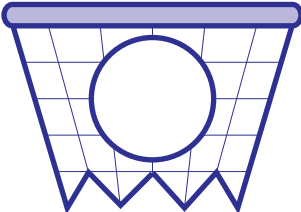
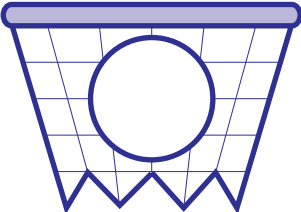
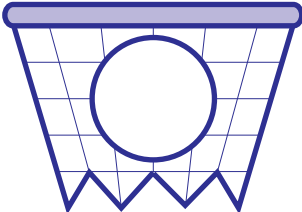
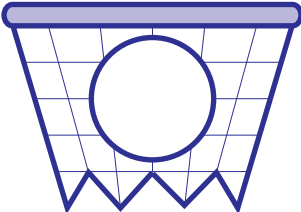


Slam dunk these
math problems!

MATH JAM!
#5

Write the answers
in each hoop.

| | | | |
|--|--|--|--|
|  $16 + 9$ |  $30 - 12$ |  $14 + 8$ |  $18 - 13$ |
|  |  |  |  |
|  $25 - 15$ |  $7 + 22$ |  $22 - 10$ |  $13 + 9$ |
|  |  |  |  |
|  $15 + 12$ |  $27 - 18$ |  $17 + 8$ |  $29 - 14$ |
|  |  |  |  |