

Slam dunk these
math problems!

MATH JAM!
#4

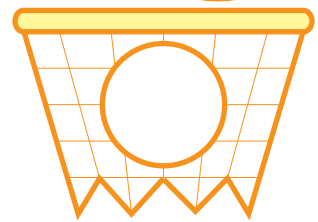
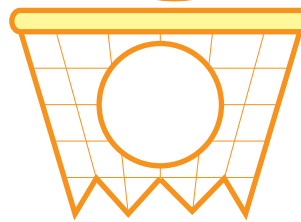
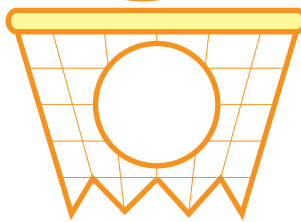
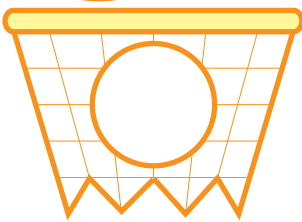
Write the answers
in each hoop.

$13 + 11$

$19 - 12$

$10 + 9$

$23 - 14$

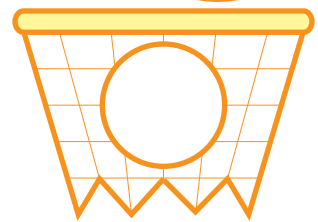
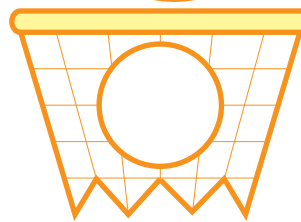
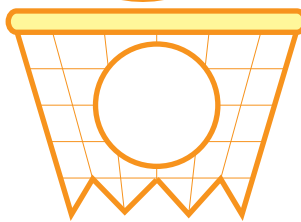
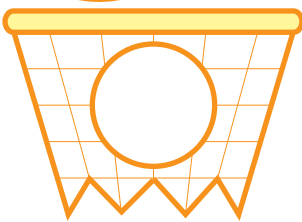


$20 - 8$

$14 + 14$

$26 - 8$

$7 + 17$



$16 + 9$

$28 - 15$

$13 + 12$

$27 - 6$

