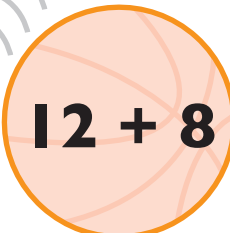



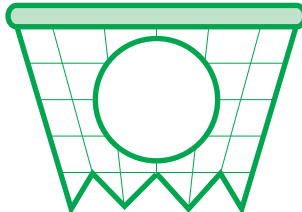
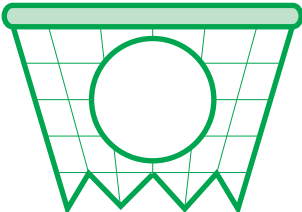
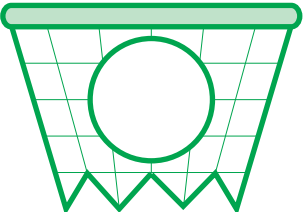
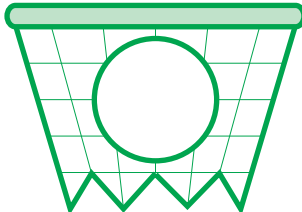

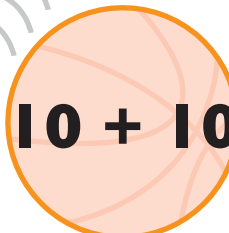


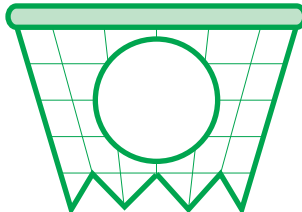
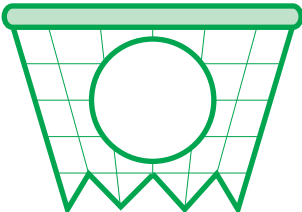
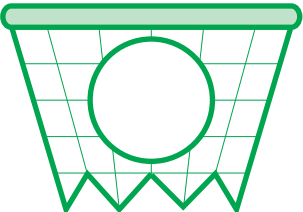
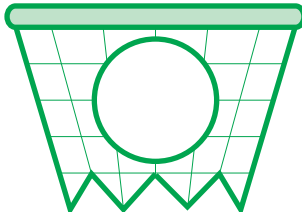
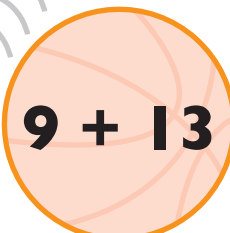



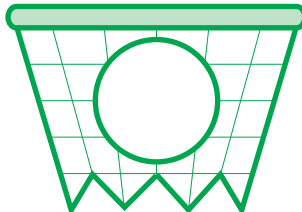
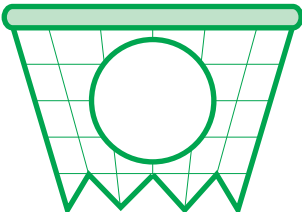
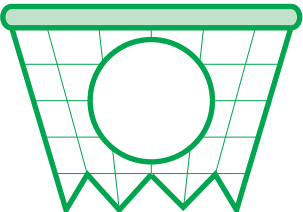
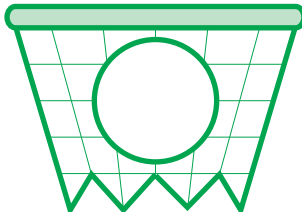


Slam dunk these
math problems!

MATH JAM!
#3

Write the answers
in each hoop.

| | | | |
|---|---|--|---|
|  $12 + 8$ |  $20 - 14$ |  $9 + 9$ |  $13 - 4$ |
|  |  |  |  |
|  $18 - 5$ |  $10 + 10$ |  $22 - 7$ |  $11 + 12$ |
|  |  |  |  |
|  $9 + 13$ |  $16 - 4$ |  $15 + 8$ |  $25 - 9$ |
|  |  |  |  |