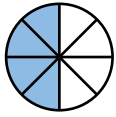
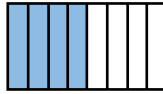


Matching Equivalent Fractions


Equivalent fractions have an equal value, but they may look different.



is equivalent to




Both visual models represent
the fraction $\frac{4}{8}$



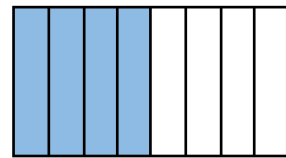
Part 1: Visual Models

Directions: Draw a line to match equivalent fractions.

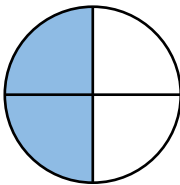
1.



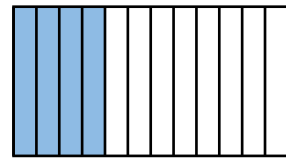
A.



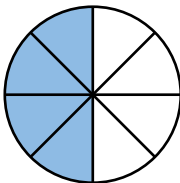
2.



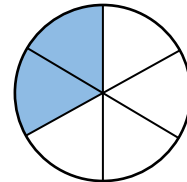
B.



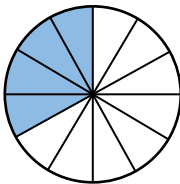
3.



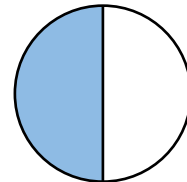
C.




4.




D.




5.



E.



6.



F.

