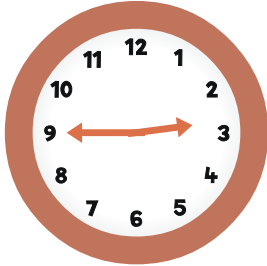
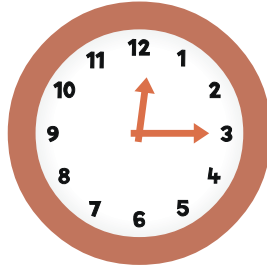

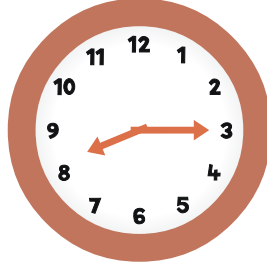
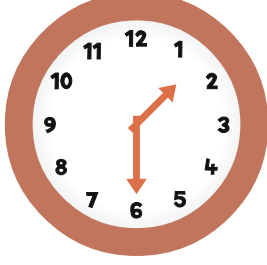

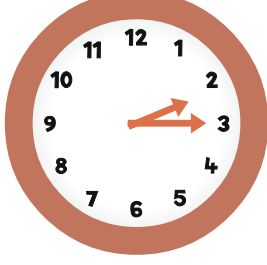
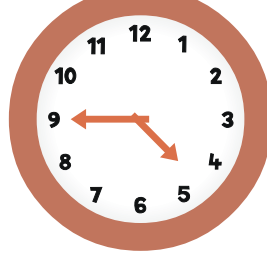
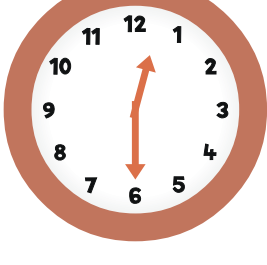



MATCH IT: QUARTER HOUR

Circle the correct time shown on each clock.

<p>1.</p>  <p>2:15 2:45 3:45</p>	<p>2.</p>  <p>12:15 3:15 3:00</p>
<p>3.</p>  <p>6:30 7:30 7:15</p>	<p>4.</p>  <p>8:45 9:15 8:15</p>
<p>5.</p>  <p>1:30 6:30 2:30</p>	<p>6.</p>  <p>9:00 9:45 10:45</p>
<p>7.</p>  <p>3:00 2:15 3:15</p>	<p>8.</p>  <p>9:15 9:45 4:45</p>
<p>9.</p>  <p>12:00 12:30 6:30</p>	<p>10.</p>  <p>8:15 8:45 9:15</p>