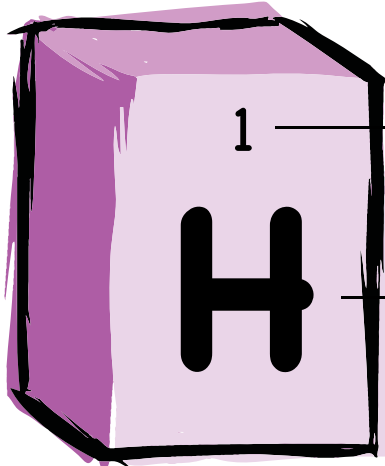


Some mischievous lab mice have been tampering with the periodic table of the elements! It's up to you to set everything back in order.

Use the given symbol, atomic number, or name to locate these elements on the periodic table on the second page and find their missing information.

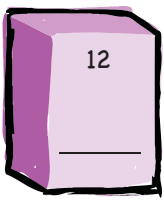
When you're done, see if you can answer the bonus question at the bottom of the page.




Atomic number

Symbol

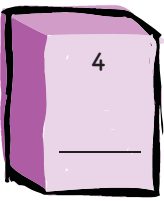
Name: Hydrogen
Category: Non-metal



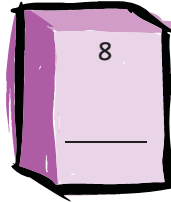
Name: _____
Category: _____



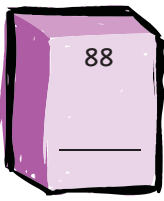
Name: Silver
Category: _____




Name: _____
Category: _____




Name: _____
Category: _____




Name: _____
Category: _____



Name: _____
Category: _____



Name: Astatine
Category: _____



Name: Potassium
Category: _____

Bonus Question:

Which of these elements is used in swimming pools to eliminate bacteria?

Periodic Table of the Elements

■ = metal ▼ = metalloid ★ = non-metal

★ 1 H hydrogen	★ 2 He helium	★ 3 Li lithium	★ 4 Be beryllium	★ 5 B boron	★ 6 C carbon	★ 7 N nitrogen	★ 8 O oxygen	★ 9 F fluorine	★ 10 Ne neon
★ 11 Na sodium	★ 12 Mg magnesium	★ 13 Al aluminum	★ 14 Si silicon	★ 15 P phosphorus	★ 16 S sulfur	★ 17 Cl chlorine	★ 18 Ar argon	★ 19 K potassium	★ 20 Ca calcium
★ 21 Sc scandium	★ 22 Ti titanium	★ 23 V vanadium	★ 24 Cr chromium	★ 25 Mn manganese	★ 26 Fe iron	★ 27 Co cobalt	★ 28 Ni nickel	★ 29 Cu copper	★ 30 Zn zinc
★ 31 Ga gallium	★ 32 Ge germanium	★ 33 As arsenic	★ 34 Se selenium	★ 35 Br bromine	★ 36 Kr krypton	★ 37 Rb rubidium	★ 38 Sr strontium	★ 39 Y yttrium	★ 40 Zr zirconium
★ 41 Nb niobium	★ 42 Mo molybdenum	★ 43 Tc technetium	★ 44 Ru ruthenium	★ 45 Rh rhodium	★ 46 Pd palladium	★ 47 Ag silver	★ 48 Cd cadmium	★ 49 In indium	★ 50 Sn tin
★ 51 Sb antimony	★ 52 Te tellurium	★ 53 I iodine	★ 54 Xe xenon	★ 55 Cs cesium	★ 56 Ba barium	★ 57 La lanthanum	★ 58 Ce cerium	★ 59 Pr praseodymium	★ 60 Nd neodymium
★ 61 Pm promethium	★ 62 Sm samarium	★ 63 Eu europium	★ 64 Gd gadolinium	★ 65 Tb terbium	★ 66 Dy dysprosium	★ 67 Ho holmium	★ 68 Er erbium	★ 69 Tm thulium	★ 70 Yb ytterbium
★ 71 Lu lutetium	★ 72 Hf hafnium	★ 73 Ta tantalum	★ 74 W tungsten	★ 75 Re rhenium	★ 76 Os osmium	★ 77 Ir iridium	★ 78 Pt platinum	★ 79 Au gold	★ 80 Hg mercury
★ 81 Tl thallium	★ 82 Pb lead	★ 83 Bi bismuth	★ 84 Po polonium	★ 85 At astatine	★ 86 Rn radon	★ 87 Fr francium	★ 88 Ra radium	★ 89 Ac actinium	★ 90 Th thorium
★ 91 Pa protactinium	★ 92 U uranium	★ 93 Np neptunium	★ 94 Pu plutonium	★ 95 Am americium	★ 96 Cm curium	★ 97 Bk berkelium	★ 98 Cf californium	★ 99 Es einsteinium	★ 100 Fm fermium
★ 101 Md mendelevium	★ 102 No nobelium	★ 103 Lr lawrencium	★ 104 Rf rutherfordium	★ 105 Db dubnium	★ 106 Sg seaborgium	★ 107 Bh bohrium	★ 108 Hs hassium	★ 109 Mt meitnerium	★ 110 Ds darmstadtium

★ 1 — atomic number

H — symbol

hydrogen — name

