
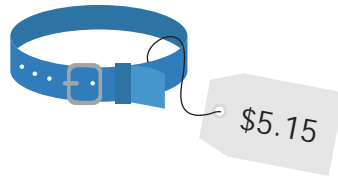


Pet Shop

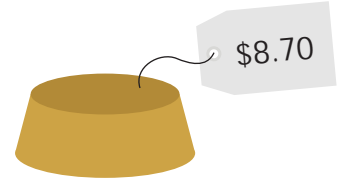
Jackie and her friends went to the pet shop to buy gifts for Patrick's new puppy, Pumpkin. Subtract to figure out how much change each person received.



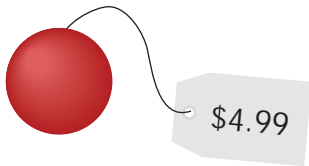
Jackie paid \$5.00
$$\begin{array}{r} \$5.00 \\ - 2.95 \\ \hline 2.05 \end{array}$$



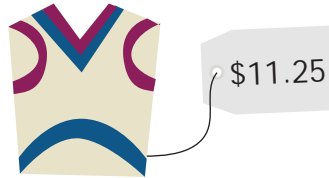
Percy paid \$6.00



Dani paid \$9.00



Lisa paid \$10.00



Nick paid \$15.00



Jenna paid \$7.00



Kim paid \$8.00



Tom paid \$20.00



Amanda paid \$7.00