



# Make 9 in Ten Frames



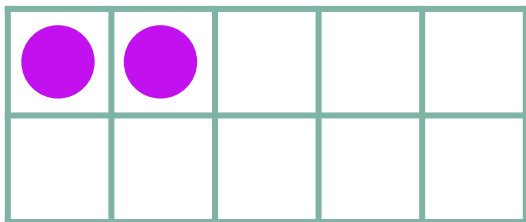
Draw circles to make 9 in each ten frame. Then use the ten frame to complete the addition sentence.



$$\begin{array}{|c|} \hline 1 \\ \hline \end{array} + \begin{array}{|c|} \hline \phantom{0} \\ \hline \end{array} = 9$$



$$\begin{array}{|c|} \hline 6 \\ \hline \end{array} + \begin{array}{|c|} \hline \phantom{0} \\ \hline \end{array} = 9$$



$$\begin{array}{|c|} \hline 2 \\ \hline \end{array} + \begin{array}{|c|} \hline \phantom{0} \\ \hline \end{array} = 9$$