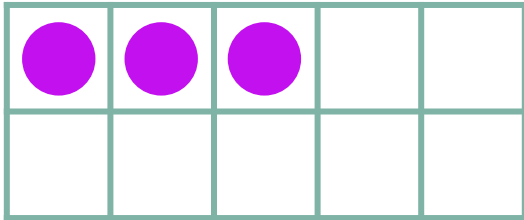



# Make 9 in Ten Frames



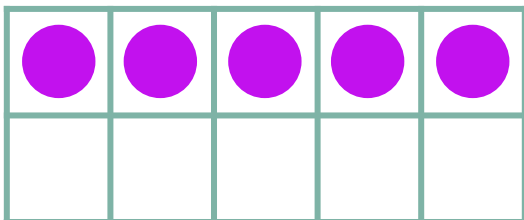
Draw circles to make 9 in each ten frame. Then use the ten frame to complete the addition sentence.



$$\begin{array}{c} \text{---} \\ \text{---} \\ \text{---} \\ \text{---} \end{array} 3 + \begin{array}{c} \text{---} \\ \text{---} \\ \text{---} \\ \text{---} \end{array} = 9$$



$$\begin{array}{c} \text{---} \\ \text{---} \\ \text{---} \\ \text{---} \end{array} 8 + \begin{array}{c} \text{---} \\ \text{---} \\ \text{---} \\ \text{---} \end{array} = 9$$



$$\begin{array}{c} \text{---} \\ \text{---} \\ \text{---} \\ \text{---} \end{array} 5 + \begin{array}{c} \text{---} \\ \text{---} \\ \text{---} \\ \text{---} \end{array} = 9$$