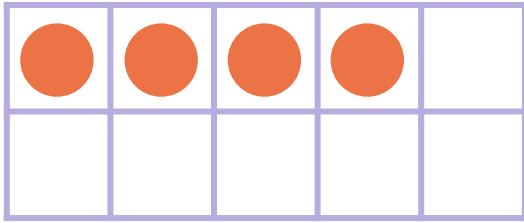


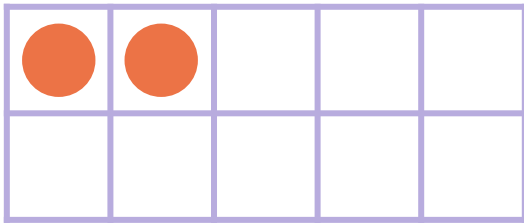
Make 8 in Ten Frames



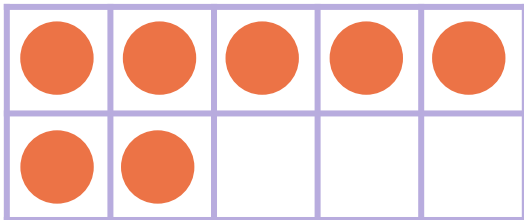
Draw circles to make 8 in each ten frame. Then use the ten frame to complete the addition sentence.



$$\begin{array}{|c|} \hline 4 \\ \hline \end{array} + \begin{array}{|c|} \hline \\ \hline \end{array} = 8$$



$$\begin{array}{|c|} \hline 2 \\ \hline \end{array} + \begin{array}{|c|} \hline \\ \hline \end{array} = 8$$



$$\begin{array}{|c|} \hline 5 \\ \hline \end{array} + \begin{array}{|c|} \hline \\ \hline \end{array} = 8$$