



Make 7 in Ten Frames




Draw circles to make 7 in each ten frame. Then use the ten frame to complete the addition sentence.



$$2 + \underline{\quad} = 7$$



$$0 + \underline{\quad} = 7$$



$$4 + \underline{\quad} = 7$$