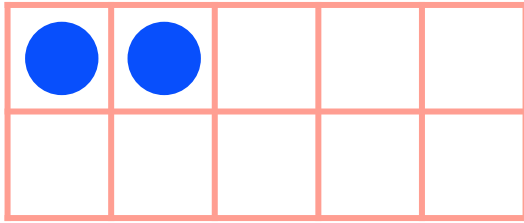


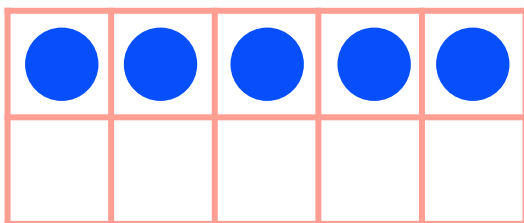
Make 6 in Ten Frames




Draw circles to make 6 in each ten frame. Then use the ten frame to complete the addition sentence.



$$2 + \underline{\quad} = 6$$



$$5 + \underline{\quad} = 6$$



$$0 + \underline{\quad} = 6$$