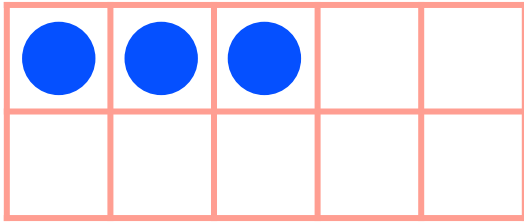


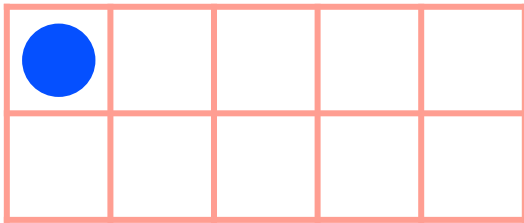
Make 6 in Ten Frames

#1

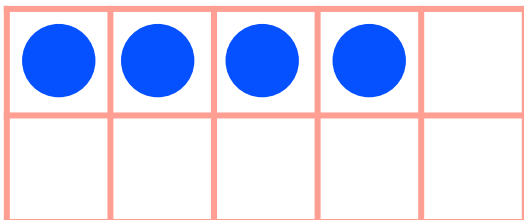
Draw circles to make 6 in each ten frame. Then use the ten frame to complete the addition sentence.



$$\begin{array}{c} \text{---} \\ \text{---} \\ \text{---} \\ \text{---} \end{array} 3 + \begin{array}{c} \text{---} \\ \text{---} \\ \text{---} \\ \text{---} \end{array} = 6$$



$$\begin{array}{c} \text{---} \\ \text{---} \\ \text{---} \\ \text{---} \end{array} 1 + \begin{array}{c} \text{---} \\ \text{---} \\ \text{---} \\ \text{---} \end{array} = 6$$



$$\begin{array}{c} \text{---} \\ \text{---} \\ \text{---} \\ \text{---} \end{array} 4 + \begin{array}{c} \text{---} \\ \text{---} \\ \text{---} \\ \text{---} \end{array} = 6$$