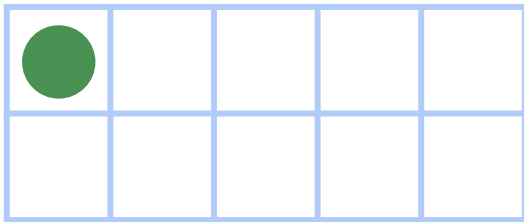


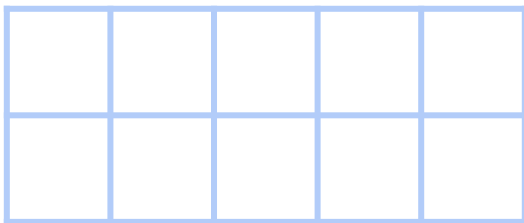
# Make 5 in Ten Frames



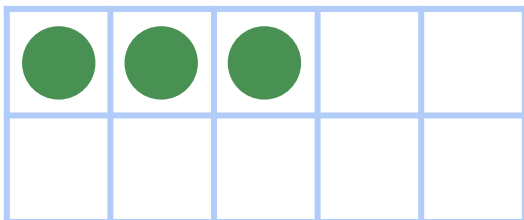
Draw circles to make 5 in each ten frame. Then use the ten frame to complete the addition sentence.



$$\begin{array}{|c|} \hline 1 \\ \hline \end{array} + \begin{array}{|c|} \hline 4 \\ \hline \end{array} = 5$$



$$\begin{array}{|c|} \hline 0 \\ \hline \end{array} + \begin{array}{|c|} \hline 5 \\ \hline \end{array} = 5$$



$$\begin{array}{|c|} \hline 3 \\ \hline \end{array} + \begin{array}{|c|} \hline 2 \\ \hline \end{array} = 5$$