


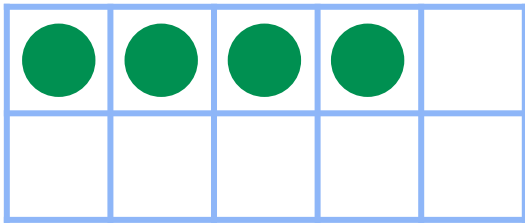
Make 5 in Ten Frames



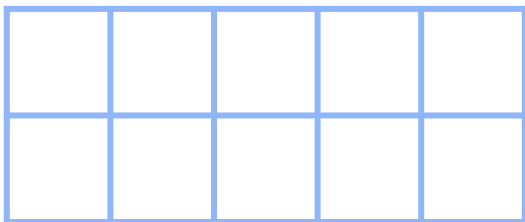
Draw circles to make 5 in each ten frame. Then use the ten frame to complete the addition sentence.



$$2 + \underline{\quad} = 5$$



$$4 + \underline{\quad} = 5$$



$$0 + \underline{\quad} = 5$$