

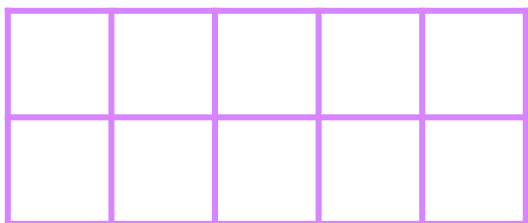


Make 3 in Ten Frames

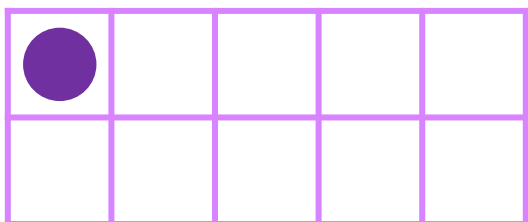
Draw circles to make 3 in each ten frame. Then use the ten frame to complete the addition sentence.



$$2 + \underline{\quad} = 3$$



$$0 + \underline{\quad} = 3$$



$$1 + \underline{\quad} = 3$$