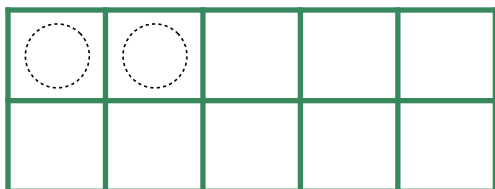
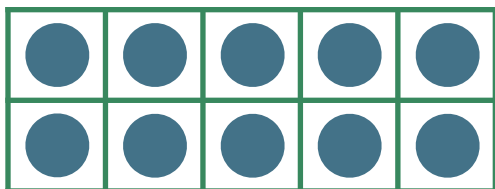



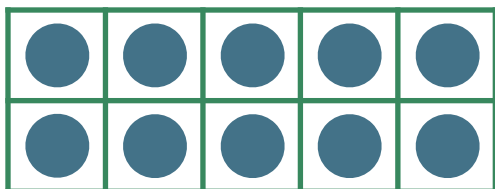
# Make 11-19 in Ten Frames #5

Make **12**. Then write an addition sentence to match the ten frames.



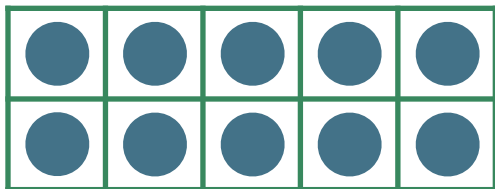
$$\begin{array}{c} \text{---} \\ | \text{ 0 } | \\ \text{---} \end{array} + \begin{array}{c} \text{---} \\ | \text{ 2 } | \\ \text{---} \end{array} = \begin{array}{c} \text{---} \\ | \text{ 12 } | \\ \text{---} \end{array}$$

Make **19**. Then write an addition sentence to match the ten frames.



$$\begin{array}{c} \text{---} \\ \text{---} \\ \text{---} \end{array} + \begin{array}{c} \text{---} \\ \text{---} \\ \text{---} \end{array} = \begin{array}{c} \text{---} \\ \text{---} \\ \text{---} \end{array}$$

Make **15**. Then write an addition sentence to match the ten frames.



$$\begin{array}{c} \text{---} \\ \text{---} \\ \text{---} \end{array} + \begin{array}{c} \text{---} \\ \text{---} \\ \text{---} \end{array} = \begin{array}{c} \text{---} \\ \text{---} \\ \text{---} \end{array}$$