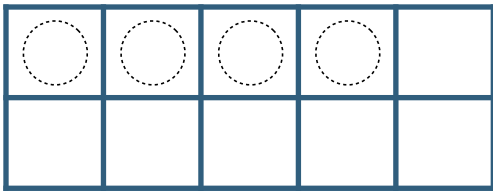
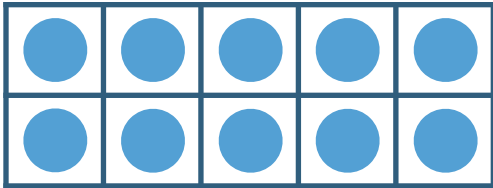



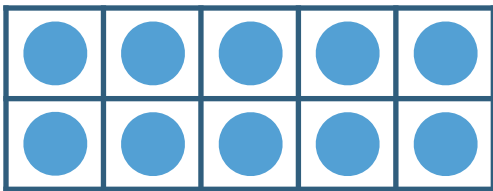
# Make 11-19 in Ten Frames #3

Make **14**. Then write an addition sentence to match the ten frames.




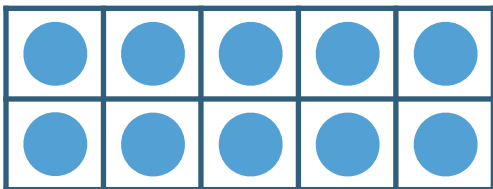
$$\begin{array}{c} \text{---} \\ | \text{O} | \\ \text{---} \end{array} + \begin{array}{c} \text{---} \\ | 4 | \\ \text{---} \end{array} = \begin{array}{c} \text{---} \\ | 14 | \\ \text{---} \end{array}$$

Make **17**. Then write an addition sentence to match the ten frames.



$$\begin{array}{c} \text{---} \\ \text{---} \\ \text{---} \end{array} + \begin{array}{c} \text{---} \\ \text{---} \\ \text{---} \end{array} = \begin{array}{c} \text{---} \\ \text{---} \\ \text{---} \end{array}$$

Make **19**. Then write an addition sentence to match the ten frames.



$$\begin{array}{c} \text{---} \\ \text{---} \\ \text{---} \end{array} + \begin{array}{c} \text{---} \\ \text{---} \\ \text{---} \end{array} = \begin{array}{c} \text{---} \\ \text{---} \\ \text{---} \end{array}$$