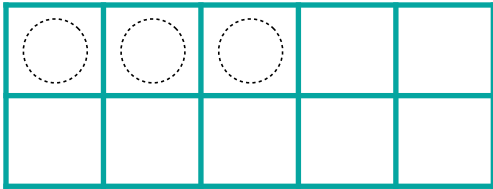





Make 11-19 in Ten Frames #1

Make **13**. Then write an addition sentence to match the ten frames.





$$\begin{array}{c} \text{---} \\ | \text{ 0 } | \\ \text{---} \end{array} + \begin{array}{c} \text{---} \\ | \text{ 3 } | \\ \text{---} \end{array} = \begin{array}{c} \text{---} \\ | \text{ 13 } | \\ \text{---} \end{array}$$

Make **12**. Then write an addition sentence to match the ten frames.



$$\begin{array}{c} \text{---} \\ \text{---} \\ \text{---} \end{array} + \begin{array}{c} \text{---} \\ \text{---} \\ \text{---} \end{array} = \begin{array}{c} \text{---} \\ \text{---} \\ \text{---} \end{array}$$

Make **16**. Then write an addition sentence to match the ten frames.



$$\begin{array}{c} \text{---} \\ \text{---} \\ \text{---} \end{array} + \begin{array}{c} \text{---} \\ \text{---} \\ \text{---} \end{array} = \begin{array}{c} \text{---} \\ \text{---} \\ \text{---} \end{array}$$