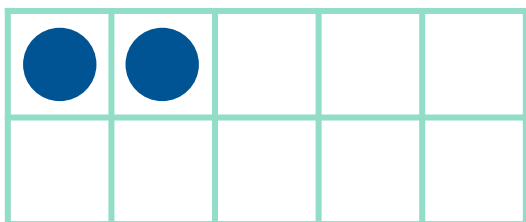


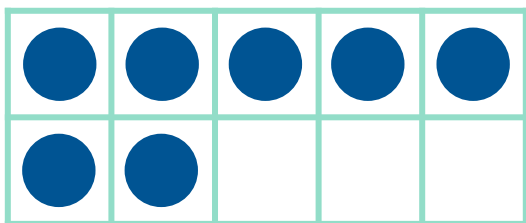
Make 10 in Ten Frames



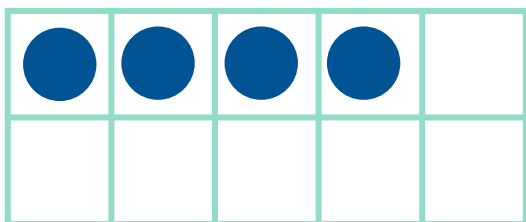
Draw circles to make 10 in each ten frame. Then use the ten frame to complete the addition sentence.



$$2 + \underline{\quad} = 10$$



$$7 + \underline{\quad} = 10$$



$$4 + \underline{\quad} = 10$$