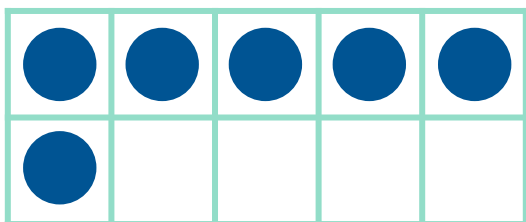


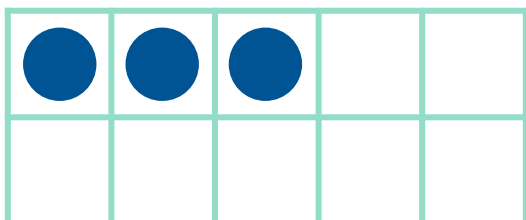
# Make 10 in Ten Frames




Draw circles to make 10 in each ten frame. Then use the ten frame to complete the addition sentence.



$$\begin{array}{c} \text{---} \\ 6 \\ \text{---} \end{array} + \begin{array}{c} \text{---} \\ \text{---} \\ \text{---} \end{array} = 10$$



$$\begin{array}{c} \text{---} \\ 3 \\ \text{---} \end{array} + \begin{array}{c} \text{---} \\ \text{---} \\ \text{---} \end{array} = 10$$



$$\begin{array}{c} \text{---} \\ 1 \\ \text{---} \end{array} + \begin{array}{c} \text{---} \\ \text{---} \\ \text{---} \end{array} = 10$$