


Liquid Volume Logic

Liquid Volume is the quantity of three-dimensional space a liquid occupies at rest.




This looks like a large bottle of soda, so I would measure it in gallons or liters. I could measure it in cups but it'll take a long time!



This looks like a spoon that I would use for cereal. I would use teaspoons or tablespoons to measure how much liquid is in this spoon.

Directions: Choose the best unit of measurement and explain why you chose it.

1. Which unit of measurement would you choose?



Explain your reasoning:

2. Which unit of measurement would you choose?



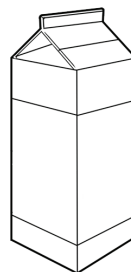
Explain your reasoning:

3. Which unit of measurement would you choose?



Explain your reasoning:

4. Which unit of measurement would you choose?



Explain your reasoning:
