

Line Plot Practice

A **line plot** is a graph that shows data. The X on a line plot represents a piece of data.

1. Use the data in the list to create a line plot.

Length of Ropes

Length of Ropes

4 inches

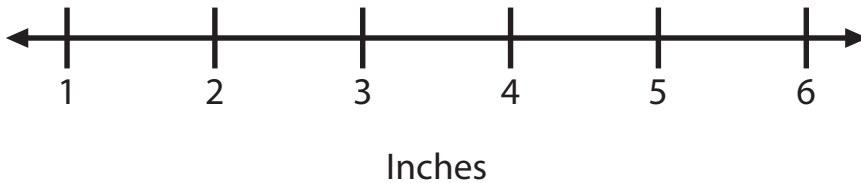
5 inches

3 inches

5 inches

1 inch

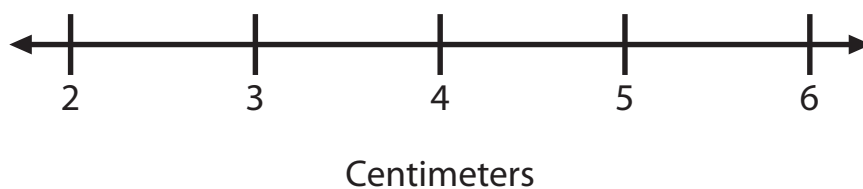
6 inches



2. Seven children measured the lengths of crayons. The lengths are recorded below. Create a line plot using the data.

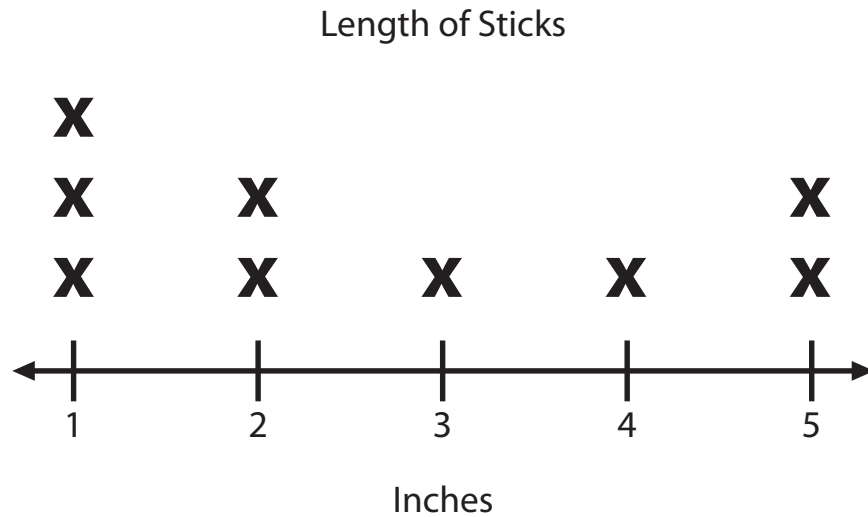
2 cm	4 cm	3 cm	6 cm	3 cm	5 cm	3 cm
------	------	------	------	------	------	------

Length of Crayons



Line Plot Practice

3. The line plot shows the lengths of sticks in inches. Use the line plot to answer the questions.



a. How many sticks are 2 inches long? _____

b. What is the length of most of the sticks? _____

c. What does each X stand for on the line plot? _____

4. Use the data in the list to create a line plot. Remember to give your line plot a title and a label on the bottom!

Length of Strips

6 cm

5 cm

3 cm

2 cm

6 cm

4 cm

1 cm

5 cm

