









Counting Coins

How many coins are in each row? Write the answer in the blue box.
Add the coins up and write the total amount in the pink box.

| | | | |
|--|----------------------|----------------------|---|
|  | <input type="text"/> | <input type="text"/> | ¢ |
|  | <input type="text"/> | <input type="text"/> | ¢ |
|  | <input type="text"/> | <input type="text"/> | ¢ |
|  | <input type="text"/> | <input type="text"/> | ¢ |
|  | <input type="text"/> | <input type="text"/> | ¢ |
|  | <input type="text"/> | <input type="text"/> | ¢ |
|  | <input type="text"/> | <input type="text"/> | ¢ |
|  | <input type="text"/> | <input type="text"/> | ¢ |