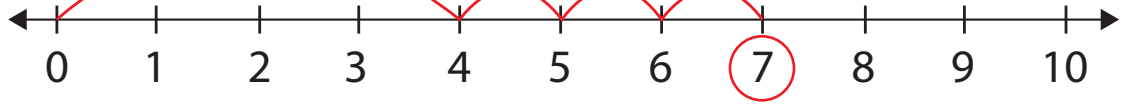


NUMBER LINE ADDITION 3

Solve the following problems using the number line. Show each problem on the number line, then write the answer. The first one is done for you.

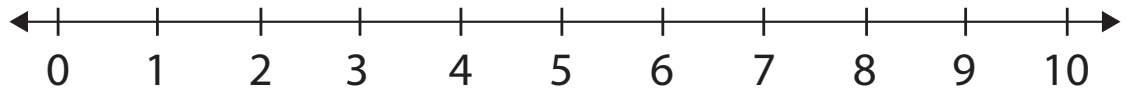


$4 + 3 = 7$

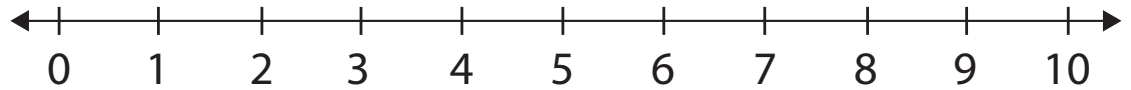


Parent tip: First ask your child to make one big jump from 0 to 4. Then ask him to make tiny jumps to move 3 spaces ahead and circle the number he lands on.

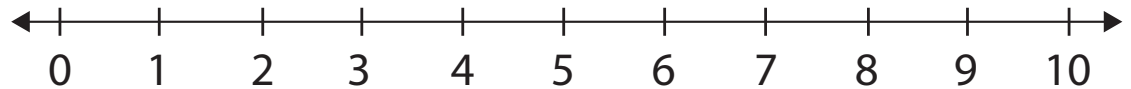
$5 + 5 = \dots\dots\dots$



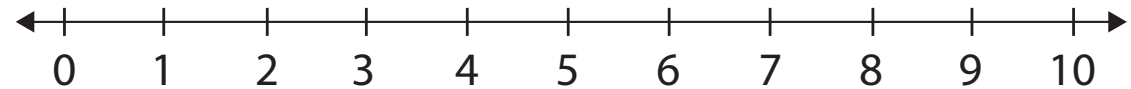
$2 + 7 = \dots\dots\dots$



$6 + 2 = \dots\dots\dots$



$4 + 2 = \dots\dots\dots$



$9 + 1 = \dots\dots\dots$

