






Jake's Nature Hike

Jake went on a nature hike. He saw deer, turkeys, hummingbirds, lizards, and geese.
Help Jake make a bar graph of the animals he saw!

				
Deer	Turkeys	Hummingbirds	Lizards	Geese
3	4	2	11	8

Directions:

- 1) Title your graph!
- 2) Label the parts of your graph.
- 3) Figure out a scale to fit the number of animals Jake saw.
- 4) Graph the information.

