



Who Ate More?

Find out who ate more by comparing the fractions in each question.


Lucy and Judy each had a pie of equal size. Lucy divided her pie into 6 equal slices and ate 2 of them. Judy divided her pie into 4 slices and ate 3 of them. Who ate more pie?



Mick the monkey had 10 bananas. He ate two-fifths of them. Mikey the monkey also had 10 bananas and he ate half of them. Which monkey ate more bananas?



Pete bought 8 bags of popcorn and ate three-fourths of them. Sandra bought 6 bags of popcorn and ate two-thirds of them. Who ate more popcorn?



Tanya and Shawna each had one watermelon of equal size. Tanya divided hers into 12 equal slices and ate 8 of them. Shawna divided hers into 20 slices and ate 15 of them. Who ate more watermelon?

