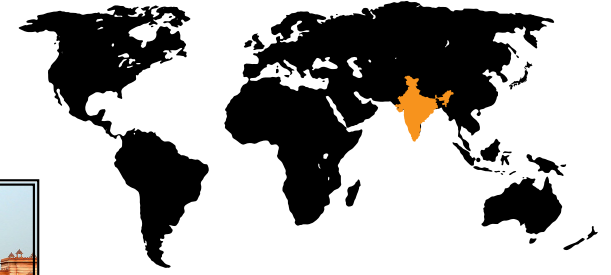


LET'S TRAVEL TO INDIA!



I. MATCH THE LANDMARKS USING THE FOLLOWING CHOICES:

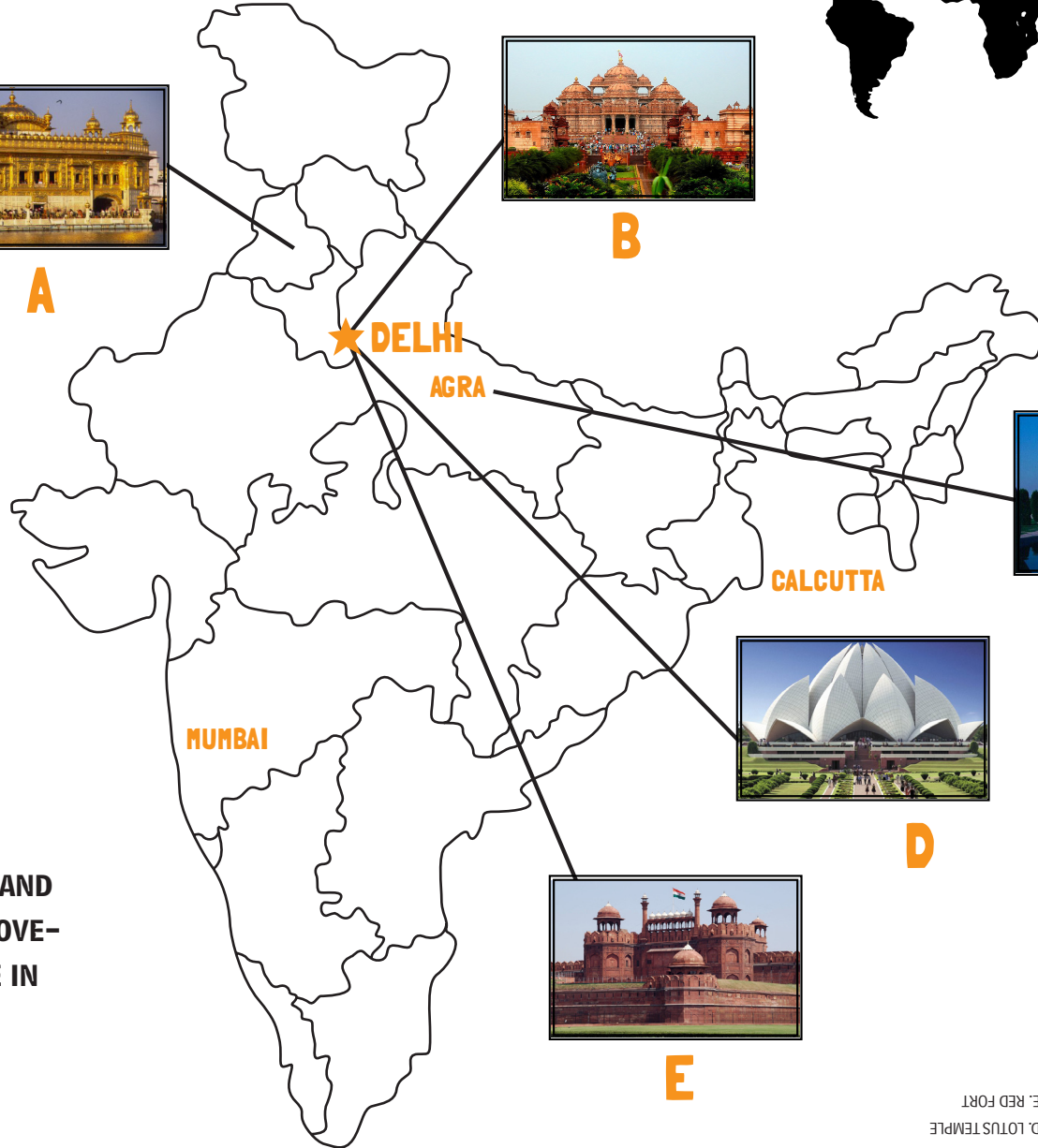
- ___ GOLDEN TEMPLE
- ___ TAJ MAHAL
- ___ RED FORT
- ___ AKSHARDHAM TEMPLE
- ___ LOTUS TEMPLE



A



B




★ **DELHI**


AGRA

CALCUTTA

MUMBAI



C



D



E

II. MATCH THE FOLLOWING ITEMS:

- 1- JATI
- 2- RUPEE
- 3- ARYABHATTA
- 4- MAHATMA GANDHI

- ___ THE INDIAN SCIENTIST THAT INVENTED THE DIGIT ZERO
- ___ OFFICIAL CURRENCY OF INDIA
- ___ THE NATIVE TERM FOR THE HINDU CASTE SYSTEM
- ___ THE MOST PROMINENT POLITICAL AND SPIRITUAL LEADER DURING THE MOVEMENT FOR INDIA'S INDEPENDENCE IN THE 20TH CENTURY

I. ANSWERS:
A. GOLDEN TEMPLE
B. AKSHARDHAM TEMPLE
C. TAJ MAHAL
D. LOTUS TEMPLE
E. RED FORT

II. ANSWERS:
3. 2, 1, 4